






# Фигураларны ата



# Фигураларны тап



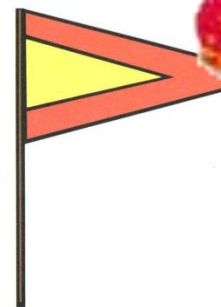
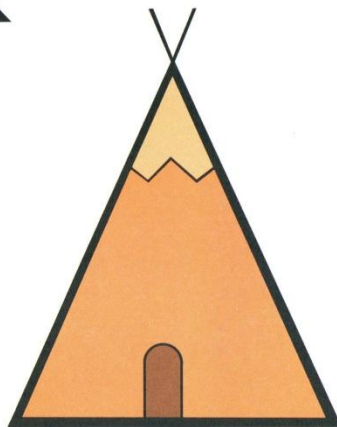


# Зурлыклар



II-1



# Фигураларны тап



III-4



# Саннарны дәрәс куй

1

8

5

3

7

6

4

2

9

0



## Мисалларны чиш

$$3+4=$$

$$10-5=$$

$$6-2=$$

$$2+7=$$



# Билгелэрне куй

$1 \square 8$

$6 \square 9$

$5 \square 2$

$2 \square 1$

$9 \square 7$

$3 \square 8$

$4 \square 3$

$5 \square 5$

>

<

=



# Портрет

