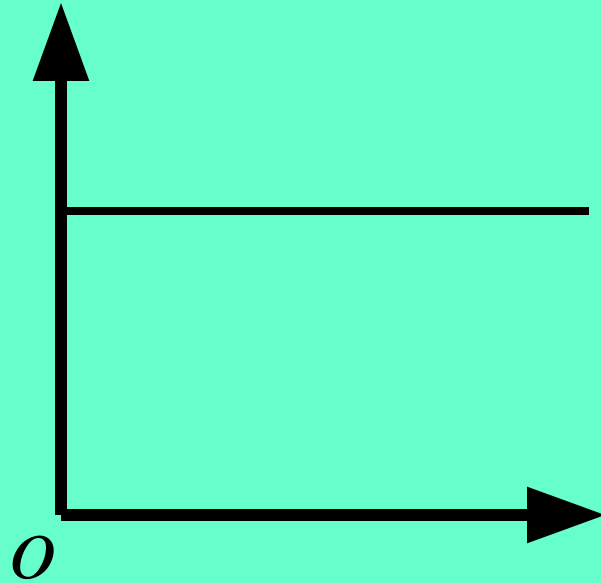


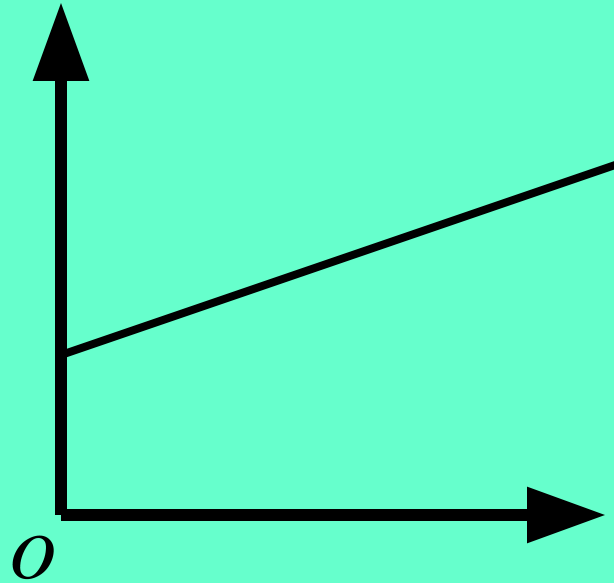
Привал 3

Найдите функцию и формулу, соответствующую графику

Физика + Математика

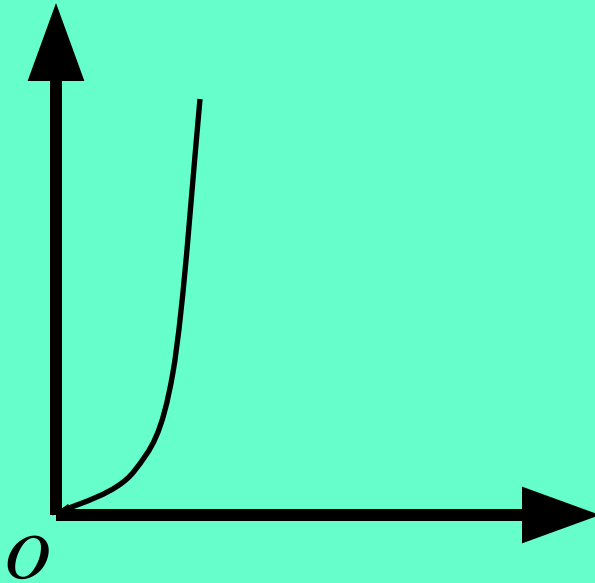


$$v_x = \text{const} \quad y = |a|, npu$$
$$x \geq 0$$

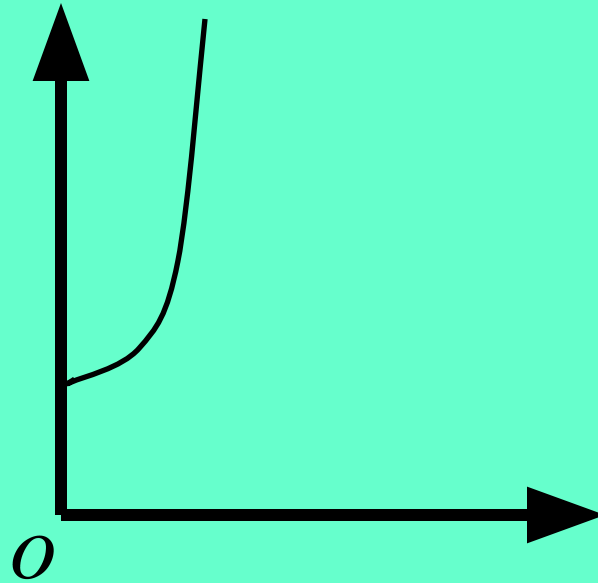


$$v_x = v_{ox} + a_x t \quad y = kx + b$$

npu $x \geq 0$



$$s = v_0 t + \frac{at^2}{2} \quad y = ax^2, x \geq 0$$



$$x = x_0 + v_0 t + \frac{a t^2}{2} \quad y = ax^2 + c$$

$$\text{npu } x \geq 0$$