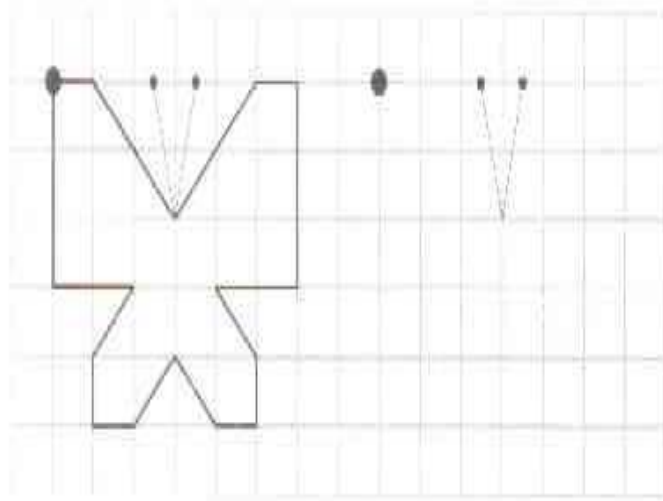


**Диагностическая работа №  
2  
1 класс**



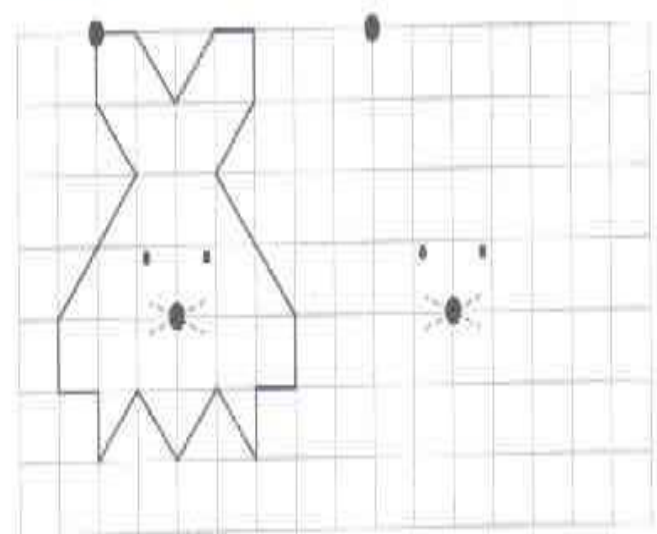
# Вариант 1

Задание 1



# Вариант 2

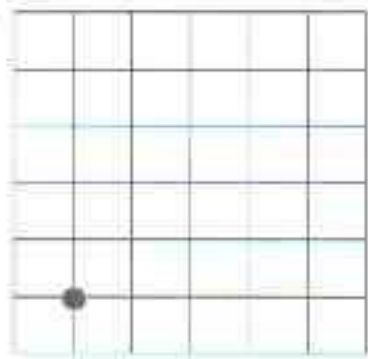
Задание 1



# Вариант 1


# Вариант 2

Задание 2



1↑ 1→ 2↑ 1← 1↑ 3→

Задание 2




1→ 1↑ 1← 3↑ 2→ 1↓ 1→

# Вариант 1

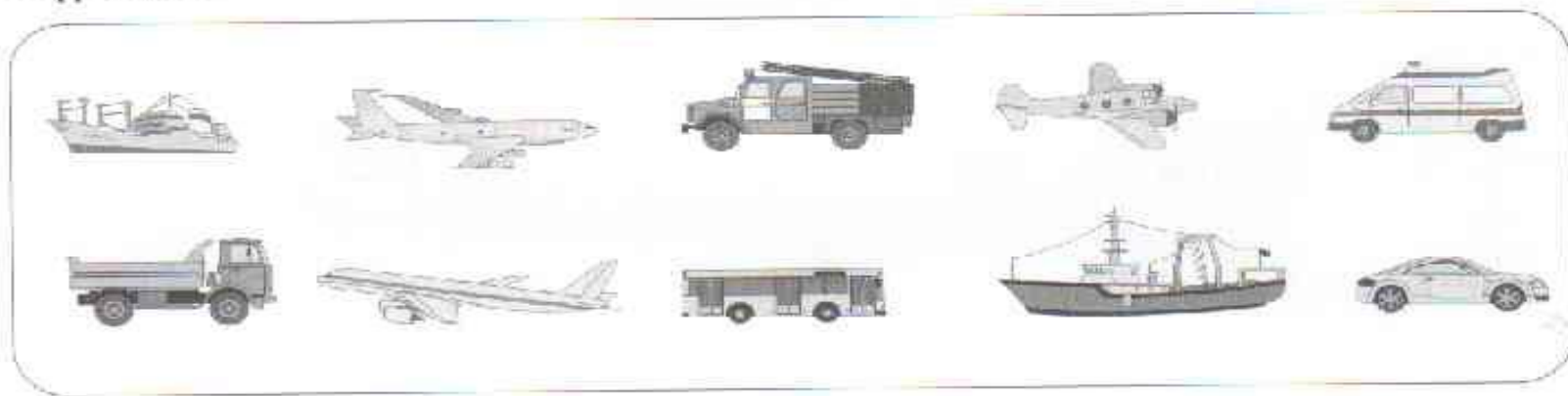
1 2 3 4 5 6

## Задание 3



# Вариант 2

## Задание 3



# Вариант 1

Задание 4

Handwriting practice task 4, Variant 1. It consists of three rounded rectangular boxes. The top-left box contains three cats, four dogs, and a group of two dogs circled with an arrow pointing right. Below are two rows of shapes: the first row has three circles, one square, one square, and one square; the second row has four empty boxes. The top-right box contains five flags, two flags circled with an arrow pointing right. Below are two rows of shapes: the first row has four circles, one circle with a diagonal slash, and one circle with a diagonal slash; the second row has four empty boxes. The bottom box contains five stars, three stars circled with an arrow pointing right. Below are two rows of shapes: the first row has five circles, one circle with a diagonal slash, and one circle with a diagonal slash; the second row has four empty boxes.


# Вариант 2

Задание 4

Handwriting practice task 4, Variant 2. It consists of three rounded rectangular boxes. The top-left box contains four dogs, two cats, and a group of two cats circled with an arrow pointing right. Below are two rows of shapes: the first row has four squares, one circle, and one circle; the second row has four empty boxes. The top-right box contains five stars, three stars circled with an arrow pointing right. Below are two rows of shapes: the first row has four circles, one circle with a diagonal slash, and one circle with a diagonal slash; the second row has four empty boxes. The bottom box contains eight flags, two flags circled with an arrow pointing right. Below are two rows of shapes: the first row has eight circles, one circle with a diagonal slash, and one circle with a diagonal slash; the second row has four empty boxes.


# Вариант 1

## Задание 5




$2 + 4 = 7$

□ □ ○ ○ ○ ○



$6 - 3 = 3$

○ ○ ○ ○ ○ ○ ~~○~~ ~~○~~ ~~○~~




$7 - 3 = 4$

○ ○ ○ ○ ○ ○ ~~○~~ ~~○~~ ~~○~~


# Вариант 2

## Задание 5




$4 + 3 = 8$

□ □ □ □ ○ ○ ○



$7 - 4 = 3$

○ ○ ○ ○ ○ ~~○~~ ~~○~~ ~~○~~

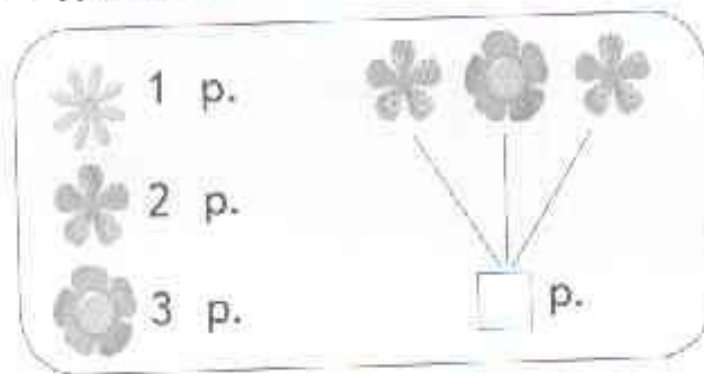


$8 - 2 = 6$

○ ○ ○ ○ ○ ○ ○ ~~○~~ ~~○~~

# Вариант 1

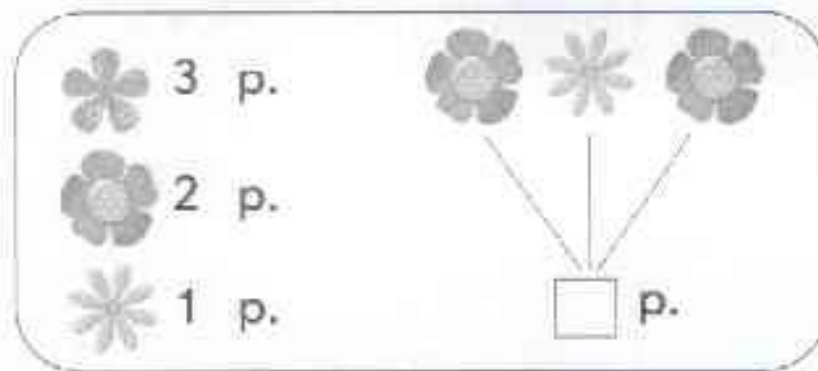
Задание 6



Задание 8

# Вариант 2

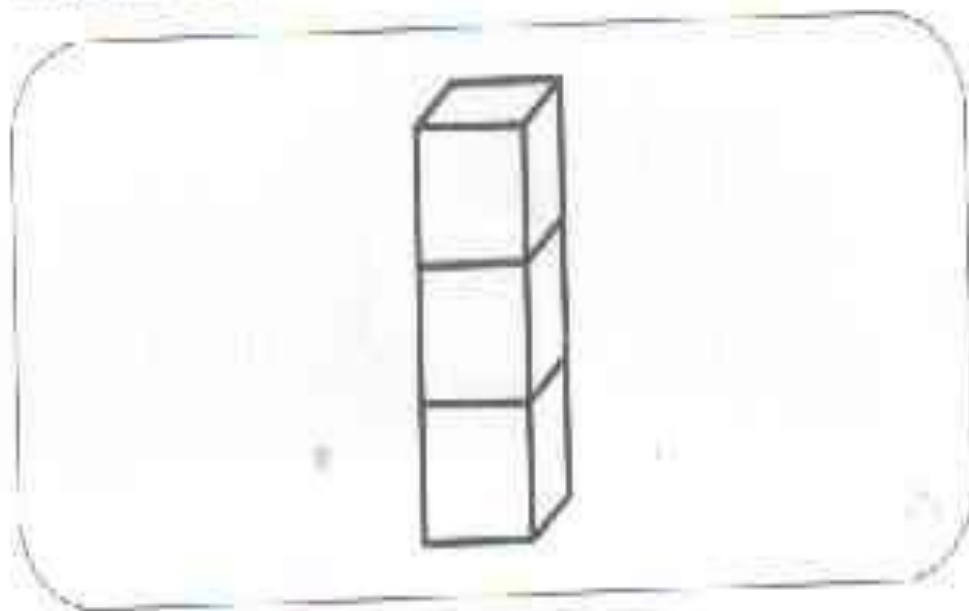
Задание 6



Задание 8

# Вариант

## Задание 7





# Вариант 1

Задание 8

$$\begin{array}{cccc} 7 - 1 & 3 + 2 & 8 - 2 & 4 + 1 \\ 6 - 1 & 6 - 2 & 2 + 3 & 7 - 2 \end{array}$$


# Вариант 2

Задание 8

$$\begin{array}{cccc} 2 + 3 & 3 + 2 & 6 - 2 & 4 + 1 \\ 6 - 1 & 8 - 2 & 7 - 1 & 7 - 2 \end{array}$$

# Вариант 1

Задание 9

Сколько  - ?

# Вариант 2

Задание 9

Сколько  - ?