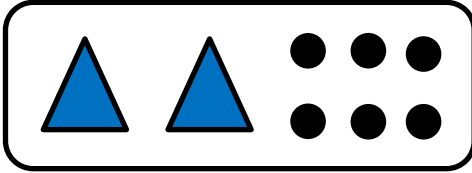
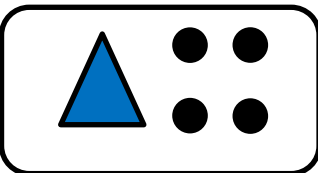
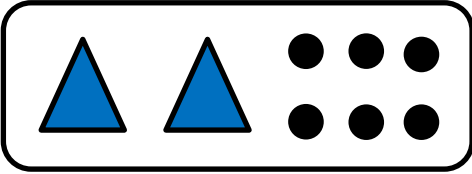
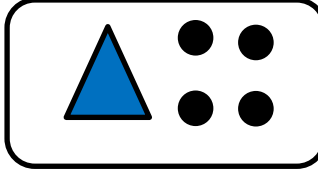
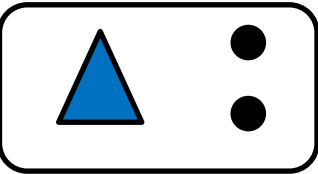
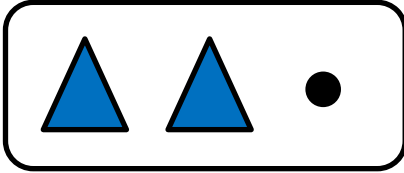
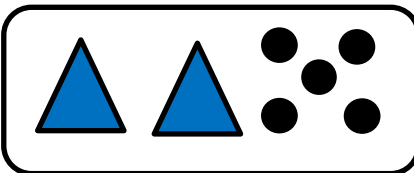

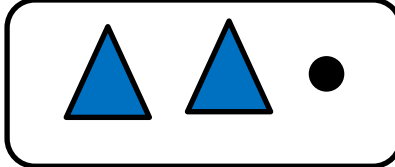



a)  - X = 

X =  - 

X = 

6)  + **X** = 

**X** =  - 

**X** = 

a)

$$5 - x =$$

$$x = 5 -$$

$$x = 3$$

б)

$$x + 7 =$$

$$x = 9 .$$

$$x = 2$$

**B)**

$$3 - X =$$

$$\cancel{X} = 3 -$$

$$\cancel{X} = 0$$

a) **РОСТ** + **X** = **СПОРТ**

**X** = **СПОРТ** - **РОСТ**

**X** = **П**

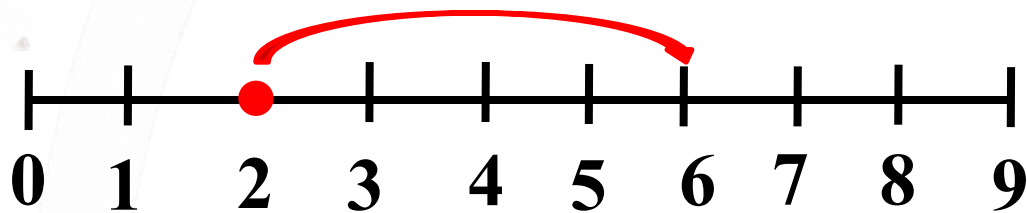
$$\text{б) } \boxed{\text{ВОЛК}} - \text{X} = \boxed{\text{ВОЛ}}$$

$$\text{X} = \boxed{\text{ВОЛК}} - \boxed{\text{ВОЛ}}$$

$$\text{X} = \boxed{\text{К}}$$

$+ x$

a)

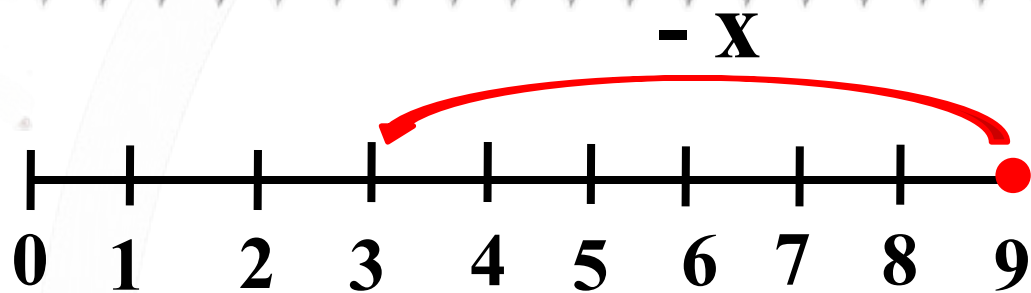


$$2 + x = 6$$

$$x = 4$$



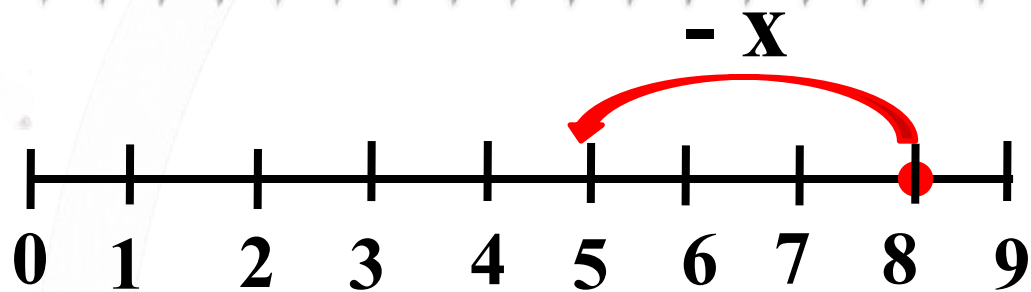
б)



$$9 - X = 3$$

$$X = 6$$

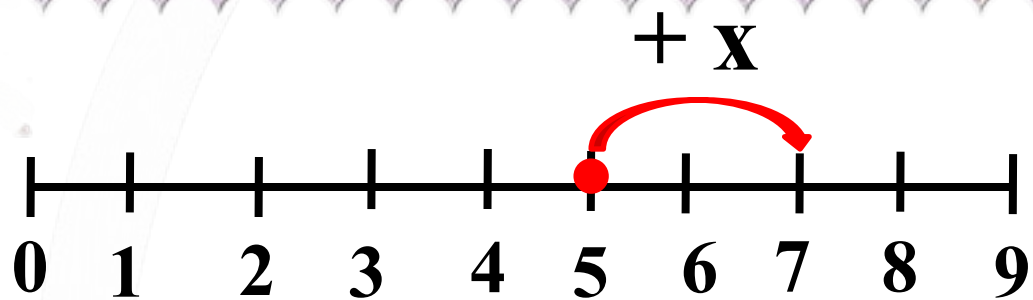
**B)**



$$8 - X = 5$$

$$X = 3$$

Г)



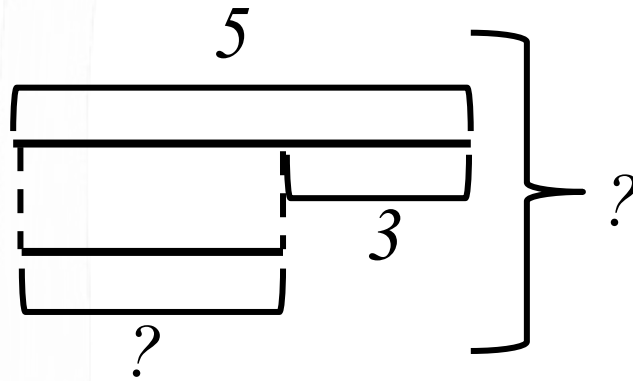
$$5 + X = 7$$

$$X = 2$$

У Винни-Пуха 5 орехов, а у Пятачка – на 3 ореха меньше. Сколько всего орехов у Пятачка и Винни-Пуха?

В.-П.

П.



$$1) 5 - 3 = 2$$

$$2) (5 + 2) = 7$$

Отв(е)т 7

т: орехов