

Time & clocks

a clock



a watch




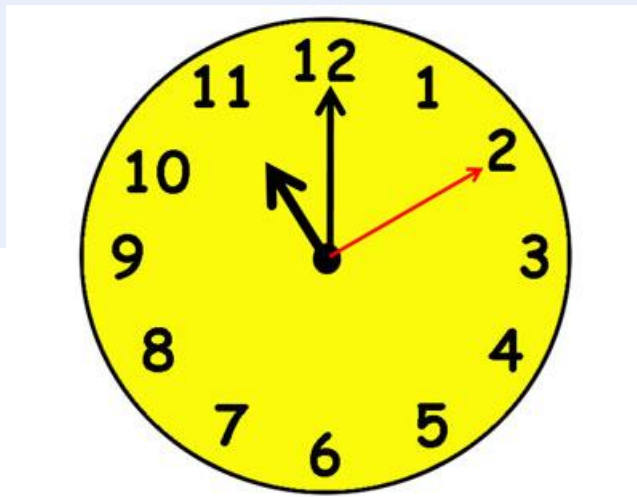
an alarm clock

What time is it?




It's ... o'clock.

What time is it?



What time it is?



phillipmartin.com

Half past one
Половина второго



phillipmartin.com

Half past ...



Half past ...



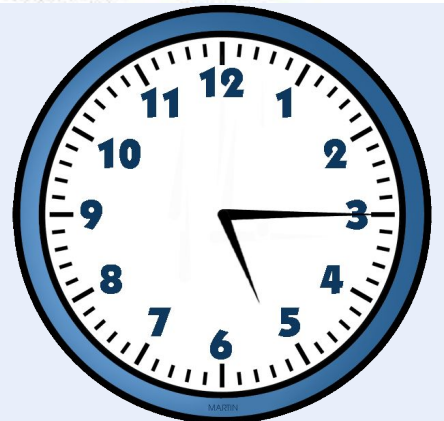
Half past ...



Half past ...



A quarter past ...



A quarter past ...



A quarter past ...



A quarter to 7

A



A quarter to ...



A quarter to ...

A quarter
past one



A quarter
to two




5 min past 12

5 min to 12



5 min ... 9

5 min ... 9



25 min ... ?

25 min ... ?





1. It's three o'clock.	A	12.30
2. It's a quarter past eight.	B	8.05
3. It's half past ten.	C	11.20
4. It's five to five.	D	1.58
5. It's half past nine.	E	8.15
6. It's twenty-five to eleven.	F	4.55
7. It's two min to two.	G	10.35
8. It's twenty past eleven.	H	9.30
9. It's five past eight.	I	10.30
10. It's half past twelve.	J	3.00



1. It's seven thirty -
2. It's five to ten -
3. It's one to one -
4. It's a quarter past three -
5. It's eight forty-five -
6. It's ten past eleven-.....
7. It's a quarter to three-
8. It's four thirty-five -
9. It's twelve o'clock -
- 10. It's two fifty-five. -

What time it is?



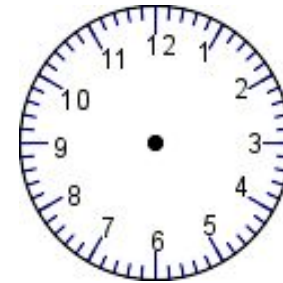
WHAT'S THE TIME? DRAW:



It's eleven o'clock.



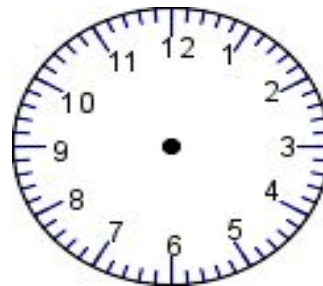
It's twenty to nine.



It's a quarter past six.



It's three thirty.



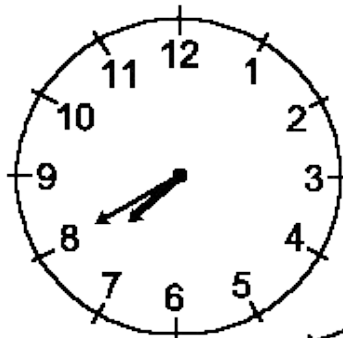
It's ten to seven.



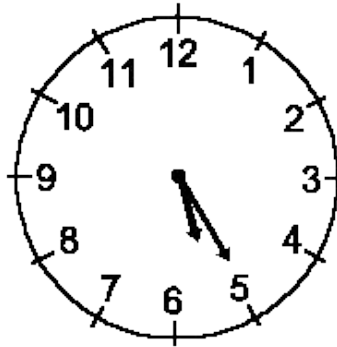
LOOK AT THE CLOCKS AND WRITE THE TIME:



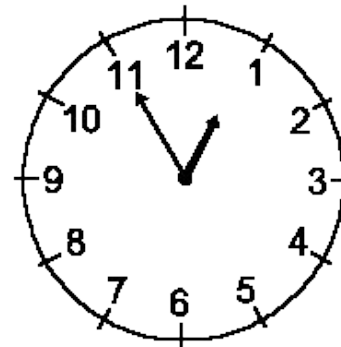
1.



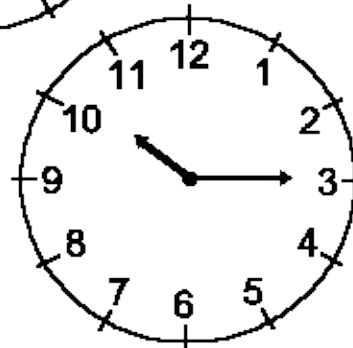
2.



3.



5.



4.

