



Welcome to our school website!

SCHOOL № 800.

School timetable

Monday

- English
- Maths
- PE
- Literature
- Russian
- Nature Studies

Tuesday

- PE
- History
- Maths
- Russian
- Russian

Wednesday

- Maths
- Russian
- Art
- Russian
- English
- Nature Studies

Thursday

- PE
- Maths
- IT
- Music
- Russian
- Literature

Friday

- Maths
- English
- History
- Technology
- Technology



Addition lessons

- Maths

Wednesday

At 16:00 pm

Brandy ran $1\frac{4}{5}$ miles.
Steve ran $1\frac{1}{3}$ miles.
How much farther did
Brandy run than Steve?

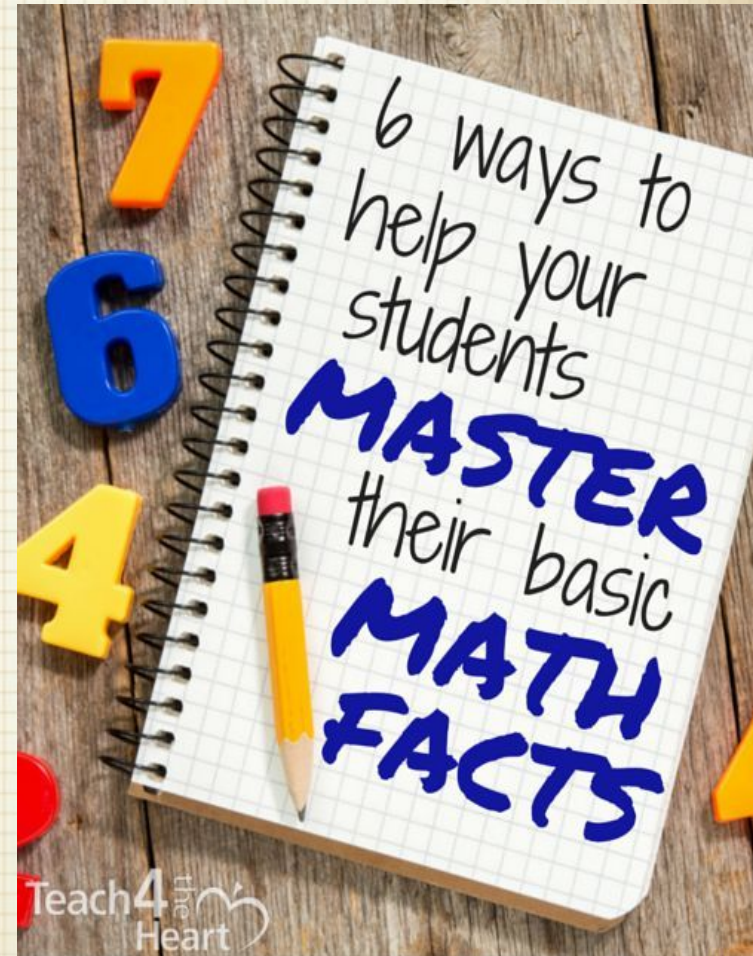
FRACTION
Word
PROBLEMS

$\frac{30}{9}$

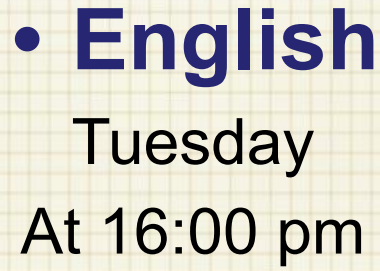
32 TASK CARDS

ANSWER KEY - FRACTION WORD PROBLEMS

1. Brandy ran $1\frac{4}{5}$ miles. Steve ran $1\frac{1}{3}$ miles. How much farther did Brandy run than Steve?	2. Sarah and Beth baked cookies for the bake sale. $\frac{1}{4}$ of the cookies were shortbread cookies, $\frac{1}{2}$ of the cookies were chocolate chip cookies and the remaining cookies were peanut butter cookies. What fraction of the cookies were peanut butter cookies?
3. $\frac{1}{2}$ of the students at our school take a bus to school. $\frac{2}{5}$ of the students are driven to school by a parent and the remaining students walk to school. What fraction of the students walk to school?	4. Aunt Jane purchased 10 pounds of potatoes. She used $7\frac{1}{2}$ pounds of potatoes to make potato salad. How many pounds of potatoes does Aunt Jane have left?
5. I have 12 coins in my pocket. $\frac{1}{3}$ of the coins are quarters, $\frac{1}{2}$ of the coins are dimes and the remaining coins are pennies. How much money do I have in my pocket?	6. Dad bought 3 pounds of carrots. He used $1\frac{1}{2}$ pounds of the carrots in a stew. How many pounds of carrots does Dad have left?
7. My grandmother made scarves for her grandchildren. $\frac{3}{8}$ of the scarves are blue, $\frac{1}{4}$ of the scarves are black, and the remaining scarves are red. What fraction of the scarves are red?	8. Aunt Jane purchased 10 pounds of potatoes. She used $7\frac{1}{2}$ pounds of potatoes to make potato salad. How many pounds of potatoes does Aunt Jane have left?
9. Sarah and Beth baked cookies for the bake sale. $\frac{1}{4}$ of the cookies were shortbread cookies, $\frac{1}{2}$ of the cookies were chocolate chip cookies and the remaining cookies were peanut butter cookies. What fraction of the cookies were peanut butter cookies?	10. Aunt Jane purchased 10 pounds of potatoes. She used $7\frac{1}{2}$ pounds of potatoes to make potato salad. How many pounds of potatoes does Aunt Jane have left?
11. I have 12 coins in my pocket. $\frac{1}{3}$ of the coins are quarters, $\frac{1}{2}$ of the coins are dimes and the remaining coins are pennies. How much money do I have in my pocket?	12. Dad bought 3 pounds of carrots. He used $1\frac{1}{2}$ pounds of the carrots in a stew. How many pounds of carrots does Dad have left?
13. My grandmother made scarves for her grandchildren. $\frac{3}{8}$ of the scarves are blue, $\frac{1}{4}$ of the scarves are black, and the remaining scarves are red. What fraction of the scarves are red?	14. Sarah and Beth baked cookies for the bake sale. $\frac{1}{4}$ of the cookies were shortbread cookies, $\frac{1}{2}$ of the cookies were chocolate chip cookies and the remaining cookies were peanut butter cookies. What fraction of the cookies were peanut butter cookies?
15. $\frac{1}{2}$ of the students at our school take a bus to school. $\frac{2}{5}$ of the students are driven to school by a parent and the remaining students walk to school. What fraction of the students walk to school?	16. Aunt Jane purchased 10 pounds of potatoes. She used $7\frac{1}{2}$ pounds of potatoes to make potato salad. How many pounds of potatoes does Aunt Jane have left?
17. I have 12 coins in my pocket. $\frac{1}{3}$ of the coins are quarters, $\frac{1}{2}$ of the coins are dimes and the remaining coins are pennies. How much money do I have in my pocket?	18. Dad bought 3 pounds of carrots. He used $1\frac{1}{2}$ pounds of the carrots in a stew. How many pounds of carrots does Dad have left?
19. My grandmother made scarves for her grandchildren. $\frac{3}{8}$ of the scarves are blue, $\frac{1}{4}$ of the scarves are black, and the remaining scarves are red. What fraction of the scarves are red?	20. Sarah and Beth baked cookies for the bake sale. $\frac{1}{4}$ of the cookies were shortbread cookies, $\frac{1}{2}$ of the cookies were chocolate chip cookies and the remaining cookies were peanut butter cookies. What fraction of the cookies were peanut butter cookies?
21. $\frac{1}{2}$ of the students at our school take a bus to school. $\frac{2}{5}$ of the students are driven to school by a parent and the remaining students walk to school. What fraction of the students walk to school?	22. Aunt Jane purchased 10 pounds of potatoes. She used $7\frac{1}{2}$ pounds of potatoes to make potato salad. How many pounds of potatoes does Aunt Jane have left?
23. I have 12 coins in my pocket. $\frac{1}{3}$ of the coins are quarters, $\frac{1}{2}$ of the coins are dimes and the remaining coins are pennies. How much money do I have in my pocket?	24. Dad bought 3 pounds of carrots. He used $1\frac{1}{2}$ pounds of the carrots in a stew. How many pounds of carrots does Dad have left?
25. My grandmother made scarves for her grandchildren. $\frac{3}{8}$ of the scarves are blue, $\frac{1}{4}$ of the scarves are black, and the remaining scarves are red. What fraction of the scarves are red?	26. Sarah and Beth baked cookies for the bake sale. $\frac{1}{4}$ of the cookies were shortbread cookies, $\frac{1}{2}$ of the cookies were chocolate chip cookies and the remaining cookies were peanut butter cookies. What fraction of the cookies were peanut butter cookies?
27. $\frac{1}{2}$ of the students at our school take a bus to school. $\frac{2}{5}$ of the students are driven to school by a parent and the remaining students walk to school. What fraction of the students walk to school?	28. Aunt Jane purchased 10 pounds of potatoes. She used $7\frac{1}{2}$ pounds of potatoes to make potato salad. How many pounds of potatoes does Aunt Jane have left?
29. I have 12 coins in my pocket. $\frac{1}{3}$ of the coins are quarters, $\frac{1}{2}$ of the coins are dimes and the remaining coins are pennies. How much money do I have in my pocket?	30. Dad bought 3 pounds of carrots. He used $1\frac{1}{2}$ pounds of the carrots in a stew. How many pounds of carrots does Dad have left?
31. My grandmother made scarves for her grandchildren. $\frac{3}{8}$ of the scarves are blue, $\frac{1}{4}$ of the scarves are black, and the remaining scarves are red. What fraction of the scarves are red?	32. Sarah and Beth baked cookies for the bake sale. $\frac{1}{4}$ of the cookies were shortbread cookies, $\frac{1}{2}$ of the cookies were chocolate chip cookies and the remaining cookies were peanut butter cookies. What fraction of the cookies were peanut butter cookies?

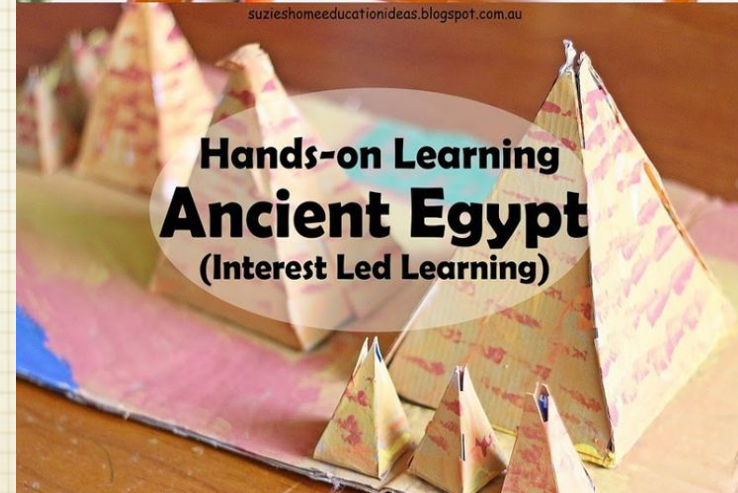


Read Through History



Addition lessons

- **History**
Tuesday
At 15:00 pm



Hands-on Learning
Ancient Egypt
(Interest Led Learning)





SCHOOL